



UNIVERSITY OF CAMBRIDGE INTERNATIONAL EXAMINATIONS
International General Certificate of Secondary Education

CANDIDATE
NAME

CENTRE
NUMBER

--	--	--	--	--

CANDIDATE
NUMBER

--	--	--	--

* 1 7 8 8 8 8 0 7 6 9 *

CO-ORDINATED SCIENCES

0654/32

Paper 3 (Extended)

May/June 2013

2 hours

Candidates answer on the Question Paper.

No Additional Materials are required.

READ THESE INSTRUCTIONS FIRST

Write your Centre number, candidate number and name on all the work you hand in.

Write in dark blue or black pen.

You may use a pencil for any diagrams or graphs.

Do not use staples, paper clips, glue or correction fluid.

DO NOT WRITE IN ANY BARCODES.

Answer **all** questions.

Electronic calculators may be used.

You may lose marks if you do not show your working or if you do not use appropriate units.

A copy of the Periodic Table is printed on page 32.

At the end of the examination, fasten all your work securely together.

The number of marks is given in brackets [] at the end of each question or part question.

This document consists of **30** printed pages and **2** blank pages.



- 1 Most of the elements in the Periodic Table can be classified as either metals or non-metals.

Fig. 1.1 shows the elements in Group 4 of the Periodic Table.

C
Si
Ge
Sn
Pb

Fig. 1.1

- (a) Use the classification of metal or non-metal to describe how the Group 4 elements differ from both Group 1 (alkali metals) and Group 7 (halogens).

.....

.....

..... [2]

- (b) Carbon occurs naturally in the Earth's crust as the uncombined element. Diamond and graphite are different forms of carbon (carbon allotropes) that have very different physical properties.

A small section of the structure of one of the carbon allotropes is shown in Fig. 1.2.

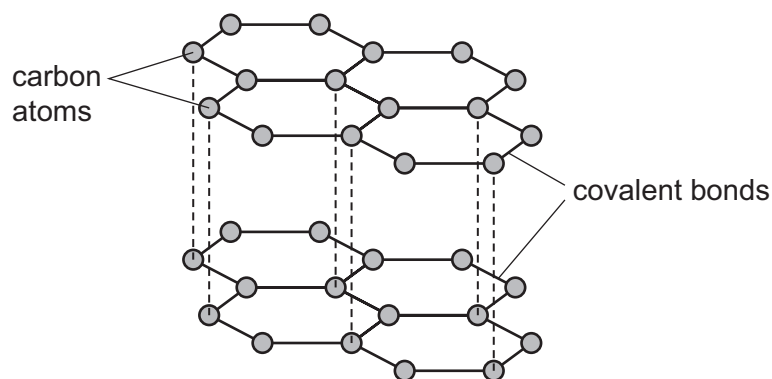


Fig. 1.2

State and explain **one** use of the carbon allotrope shown in Fig. 1.2.

.....

.....

..... [2]

(c) Fig. 1.3 shows apparatus used to extract lead from lead oxide, PbO.

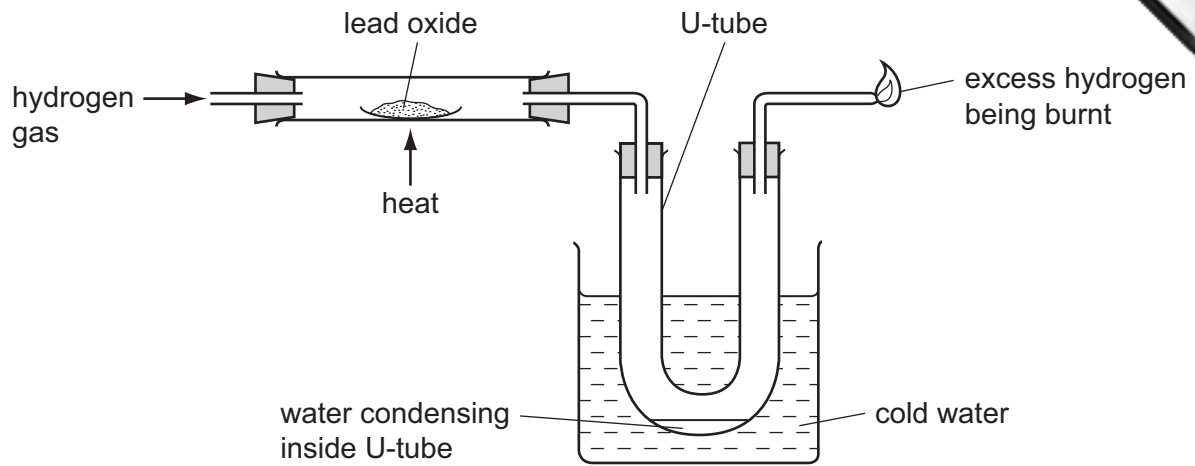


Fig. 1.3

- (i) Construct a balanced symbolic equation for the reaction between hydrogen and lead oxide.


..... [2]

- (ii) Suggest why the method shown in Fig. 1.3 could **not** be used to extract calcium from calcium oxide.

.....

 [2]

- 2 (a) An elephant of mass 5000 kg exerts a constant force of 1400 N to push a tree trunk along at a steady speed of 1.5 m/s.



- (i) Calculate the work done by the elephant when the tree trunk moves 10 m.

State the formula that you use and show your working.

formula

working

..... [2]

- (ii) Calculate the kinetic energy of the elephant when it is moving at 1.5 m/s.

State the formula that you use and show your working.

formula

working

..... [2]

- (b) The elephant has a weight of 50 000 N and stands with all four feet in contact with the ground. Each foot of the elephant has an area of 0.2 m^2 .

Calculate the pressure exerted by the elephant on the ground.

State the formula that you use and show your working.

formula

working

..... [2]

- (c) The volume of the elephant is 5 m^3 . Its mass is 5000 kg.

Calculate the density of the elephant.

State the formula that you use and show your working.

formula

working

..... [2]

3 Fig. 3.1 shows an animal cell just before it divides.

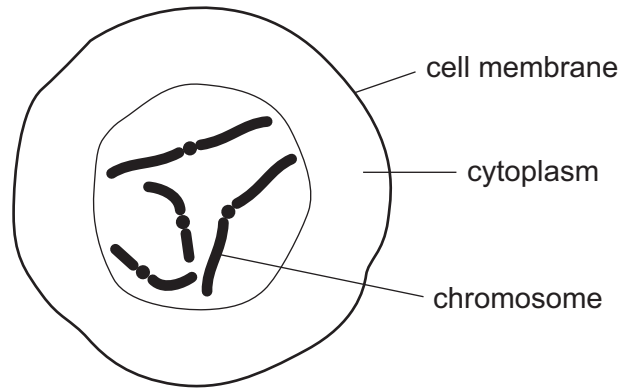


Fig. 3.1

(a) Define the term *chromosome*.

.....

 [2]

(b) The cell in Fig. 3.1 is a diploid cell.

State the number of chromosomes that there will be in each of the daughter cells if this cell divides by

mitosis,
 meiosis. [2]

(c) Describe the roles of mitosis in an animal's body.

.....

 [2]

(d) Some cattle have horns, but other cattle do not. This is determined by a gene that has two alleles. The recessive allele, **h**, produces horns.

(i) Complete Table 3.1 to show the phenotypes of cattle with each of the possible genotypes for this gene.

Table 3.1

genotype	phenotype
HH	
Hh	
hh	

[2]

(ii) A farmer has a bull with no horns. He wants to make sure that the bull does not have the recessive allele, **h**, for horns.

Suggest and explain what the farmer can do to find out whether the bull has the allele **h**.

You should use a genetic diagram as part of your answer.

.....

.....

.....

.....

.....

.....

.....

.....

.....

.....

[4]

- (b) 0.5 kg of water is heated in the microwave from 10 °C to 50 °C. The specific heat capacity of water is 4200 J/kg °C.

Calculate the energy needed to heat the water.

State the formula that you use and show your working.

formula used

working

..... [3]

- (c) The following label is found on a cooker that combines a microwave oven and a grill.

voltage	220 V
microwave power	0.60 kW
grill power	1.20 kW

Some meat is cooked using both the microwave oven and the grill. Both are switched on at full power for 30 minutes.

Calculate the total energy transferred by the cooker.

Show your working.

..... [3]

(d) Fig. 4.3 shows a reed relay being used in the door of a microwave oven.

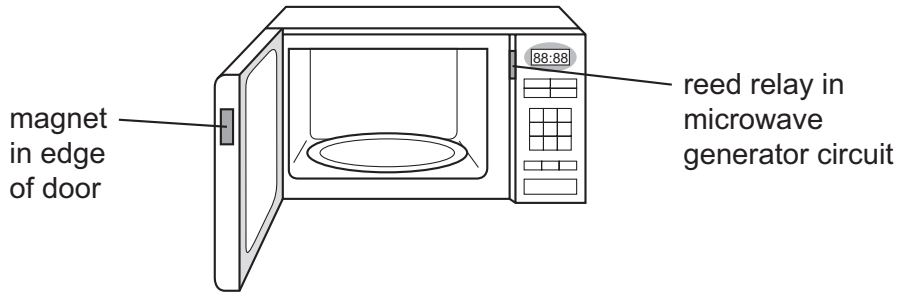


Fig. 4.3

Describe how the relay ensures that the oven only operates when the oven door is shut.

.....

.....

.....

..... [2]

- 5 (a) When sodium is burned in air a mixture of solid products, which contains the compound sodium oxide, is produced.

Fig. 5.1 shows diagrams of a sodium atom and an oxygen atom as they exist just before sodium oxide starts to form.

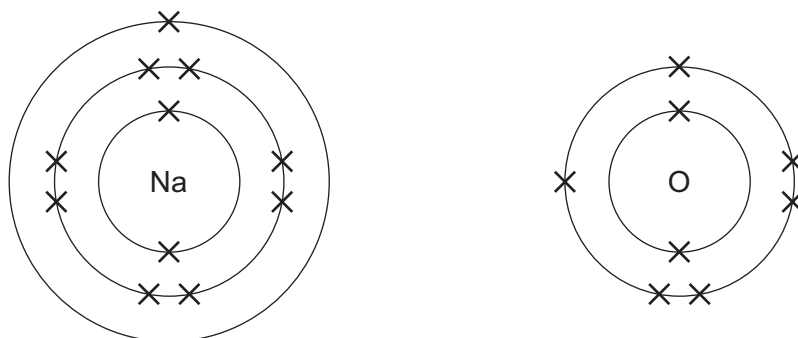


Fig. 5.1

- (i) Describe how sodium and oxygen atoms become bonded together. Your answer should explain why the formula of sodium oxide is Na_2O .

.....

.....

.....

.....

.....

.....

..... [3]

- (ii) Describe **two** differences in the properties of a typical ionic compound and a typical covalent compound.

1

.....

2

.....

[2]

- (b) Fig. 5.2 shows apparatus a student used to investigate the electrolysis of dilute sulfuric acid.

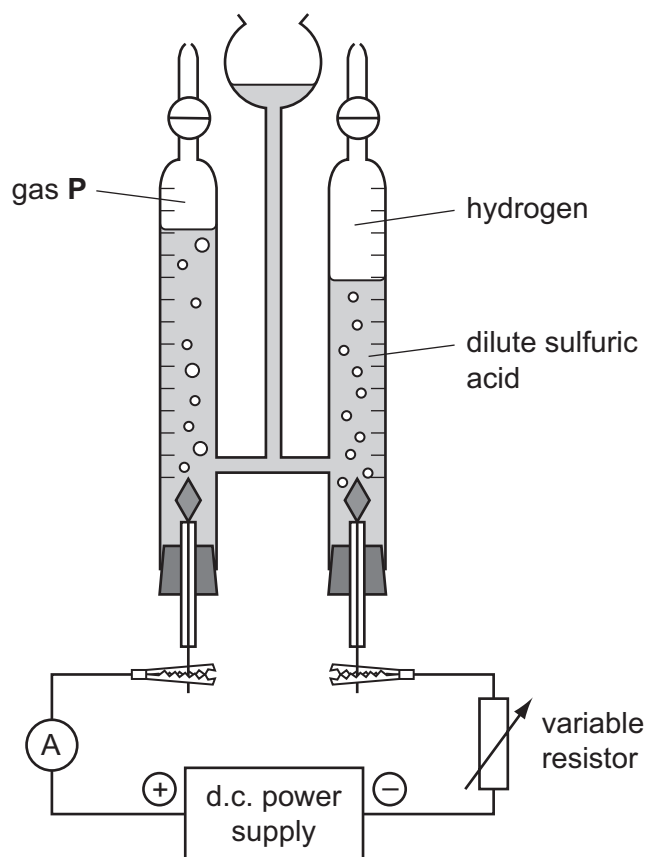


Fig. 5.2

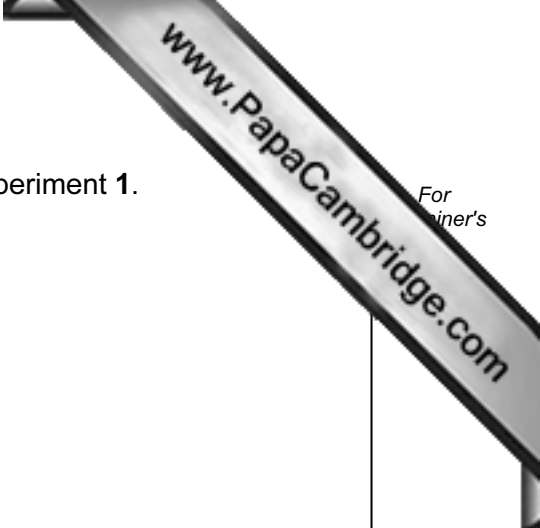
The variable resistor was included in the electrolysis circuit so that the student could alter the current.

Table 5.1 shows some of the measurements the student made in his investigation.

Table 5.1

experiment number	current / A	time current was passed / seconds	volume of hydrogen collected / cm ³
1	0.48	400	24
2	0.24	400	12

- (i) Name gas P. [1]



(ii) Calculate the rate at which hydrogen was produced in experiment 1.

Show your working and state the units.

..... [2]

(iii) Calculate the number of moles of hydrogen produced in experiment 2.

Assume that the volume of one mole of a gas under the conditions of the experiment is 24 dm³.

Show your working.

..... [2]

(iv) All dilute solutions of acids contain hydrogen ions, H⁺.

Explain the difference between the results for experiments 1 and 2 in terms of electrons, ions, atoms and electric current.

.....
.....
.....
.....
.....
.....
.....
..... [3]

6 Fig. 6.1 shows a section through a blood capillary.

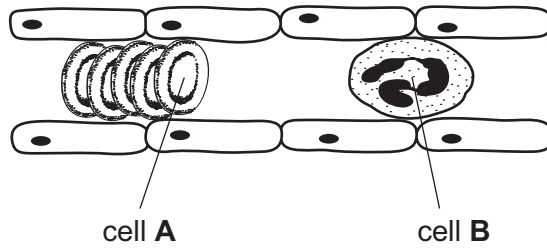


Fig. 6.1

(a) Describe how cell A transports oxygen.

.....
.....
.....
..... [2]

(b) Explain how the structure of the blood capillary helps oxygen to be provided easily to the body tissues.

.....
.....
.....
..... [2]

(c) Describe the function of cell B.

.....
.....
.....
..... [2]



7 (a) A resistor of 1200Ω is connected in parallel with another resistor of 2400Ω .

Calculate the combined resistance of these two resistors.

State the formula that you use and show your working.

formula

working

..... [3]

(b) Torches (flashlights) are usually powered by electrical cells. They can also be powered by energy from the Sun (solar energy).

Solar energy is a renewable energy resource.

(i) Write the energy resources below into Table 7.1 to show which are renewable and which are non-renewable.

- coal
 - geothermal
 - hydroelectric
 - natural gas
-
- oil
 - tidal
 - wave
 - wind

Table 7.1

renewable resource	non-renewable resource

[1]

(ii) Name the process that releases energy within the Sun.

..... [1]

(iii) Energy is transferred from the Sun to the Earth by radiation.

Explain why energy cannot be transferred from the Sun to the Earth by conduction

.....
..... [1]

(c) Fig. 7.1 shows a torch that works without electrical cells.

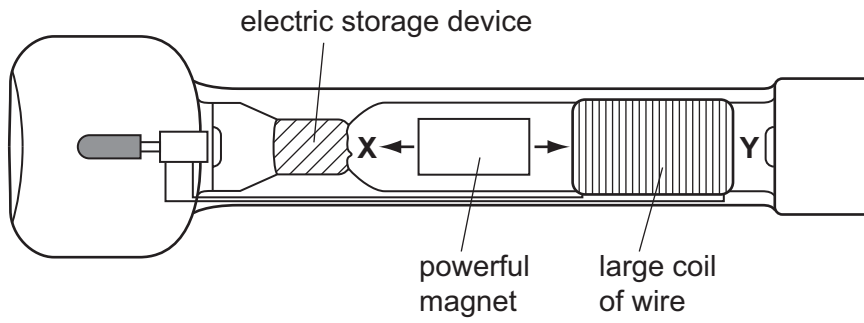


Fig. 7.1

To use the torch, it is first shaken for 40 seconds. This moves the magnet backwards and forwards inside the torch. The magnet can move between points X and Y.

Explain why shaking the torch produces an electric current.

.....
.....
.....
.....
.....
..... [4]

- 8 (a) The ovary of a flower contains one or more ovules. The ovules contain gametes. After fertilisation, an ovule becomes a seed containing an embryo plant.

Fig. 8.1 shows a pea seed developing inside a pod.

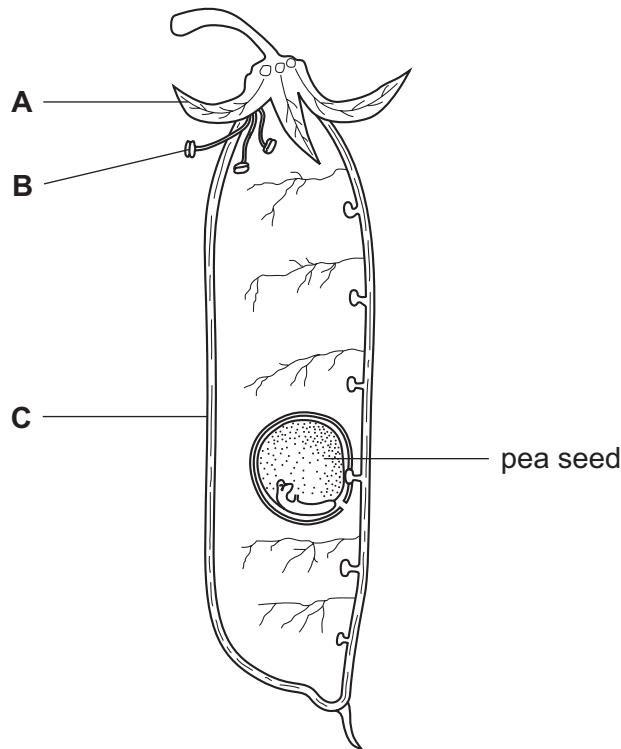


Fig. 8.1

- (i) Explain the meaning of each of the following terms.

gamete

fertilisation

[2]

- (ii) Parts **A** and **B** in Fig. 8.1 remain from the flower.

State the name and function of each of these parts **in the flower**.

name of part **A**

function

name of part **B**

function

[4]

- (iii) Suggest the part of the flower from which structure **C** developed.

..... [1]

- (b) A pea seed was planted in a pot. When the seed had grown into a young plant, the pot was placed on its side in a room where light was coming from all sides.

Fig. 8.2 shows the young pea plant three days after the pot had been placed on its side.




Fig. 8.2

- (i) Name the response shown by the pea plant in Fig. 8.2.

..... [2]

- (ii) Suggest how this response will help the plant to reproduce sexually when it has grown to maturity.

.....
.....
..... [2]

- (iii) On one of the days when the pot was placed on its side, a scientist measured
- the increase in length of the upper surface and the lower surface of the stem of the pea plant,
 - the concentration of auxin in the cells on the upper surface and lower surface of the stem of the pea plant.

His results are shown in Fig. 8.3.

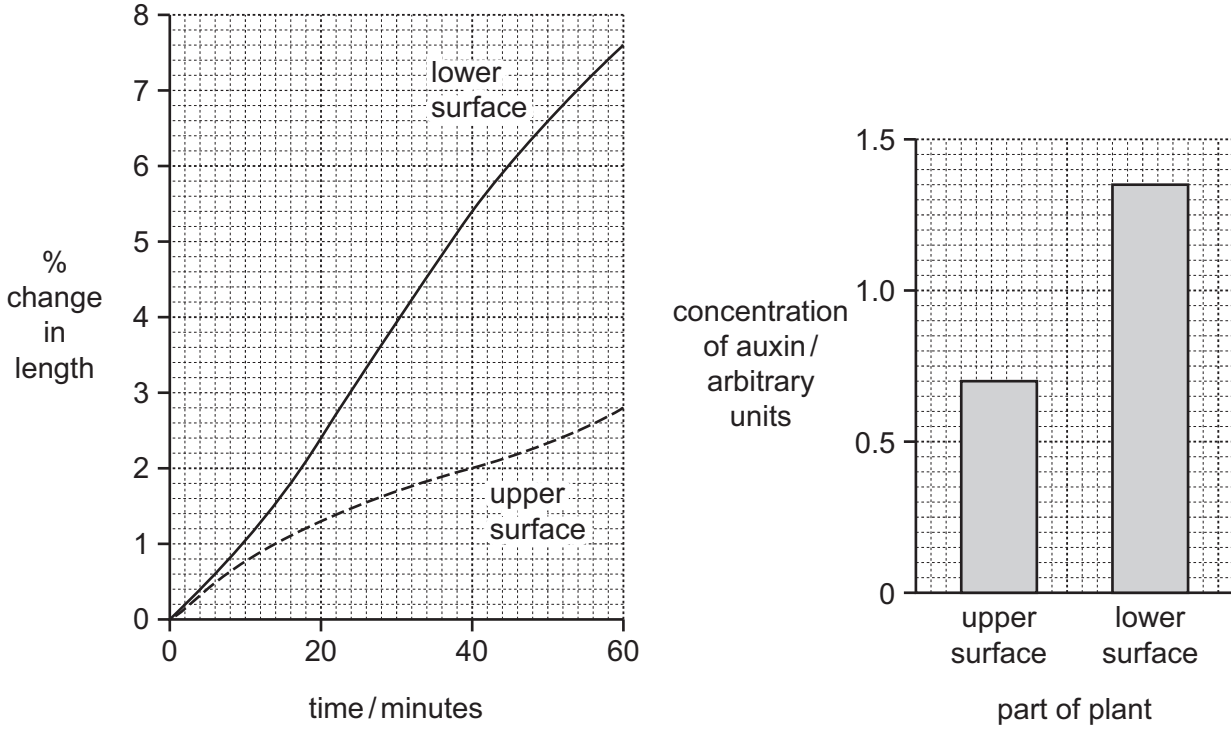


Fig. 8.3

Use the results in Fig. 8.3 to explain what has caused the stem of the pea plant to grow upwards.

.....

.....

.....

.....

.....

.....

.....

..... [3]

- 9 (a) Nylon is a synthetic polymer which can be made by mixing solutions as shown in Fig. 9.1. The simplified diagrams of molecules show the compounds that are contained in the solutions.

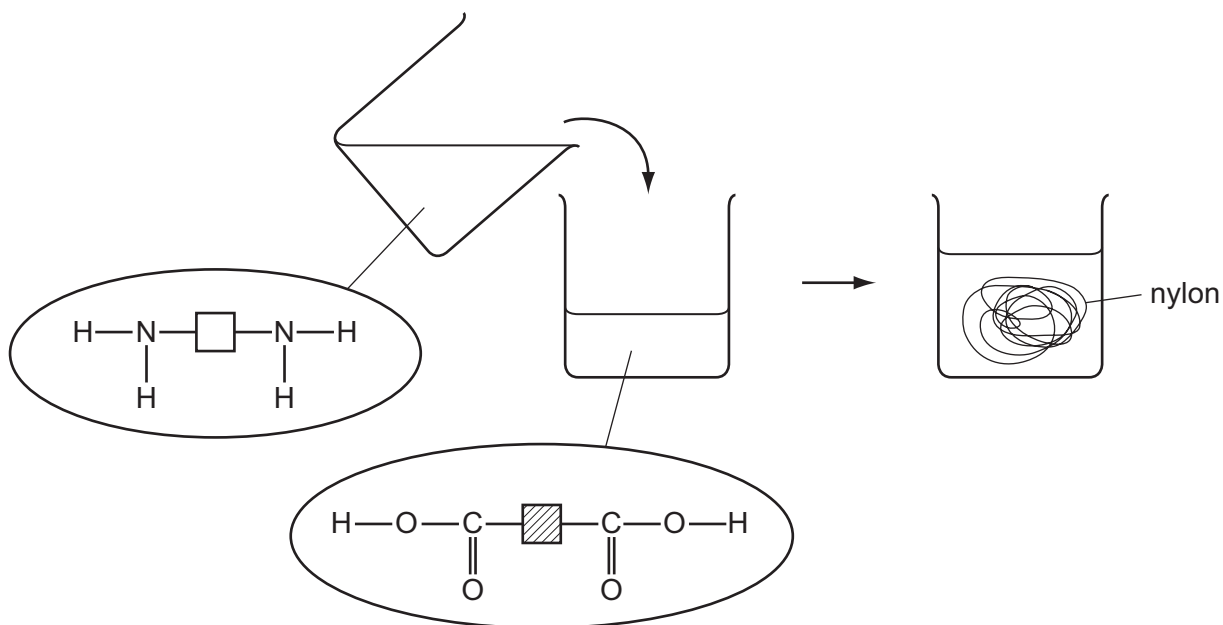


Fig. 9.1

- (i) What general name is given to small molecules that link together to form polymers?

..... [1]

- (ii) Draw a short section of the nylon molecule that forms when the molecules shown in Fig. 9.1 react together. Use the same symbols that are used in Fig. 9.1.

[3]

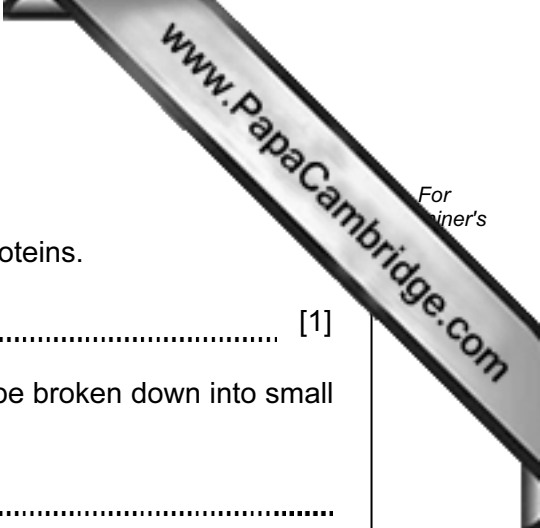
- (iii) State

- the full name of the type of chemical reaction that occurs to form nylon,

.....

- the chemical formula of the compound which is produced in addition to nylon (the by-product).

..... [2]



(b) Proteins are polymers that occur in nature.

(i) Name the type of compounds that link together to form proteins.

..... [1]

(ii) Describe briefly how the polymer chains in proteins may be broken down into small molecules.

.....
..... [2]

(iii) Name the type of chemical reaction which occurs in (ii).

..... [1]

- 10 (a) X-rays and γ (gamma) rays are both examples of ionising radiation.

Explain what is meant by the term *ionising radiation*.

.....
 [1]

- (b) Fig. 10.1 is a graph showing how the count rate of a radioactive isotope decreases with time.

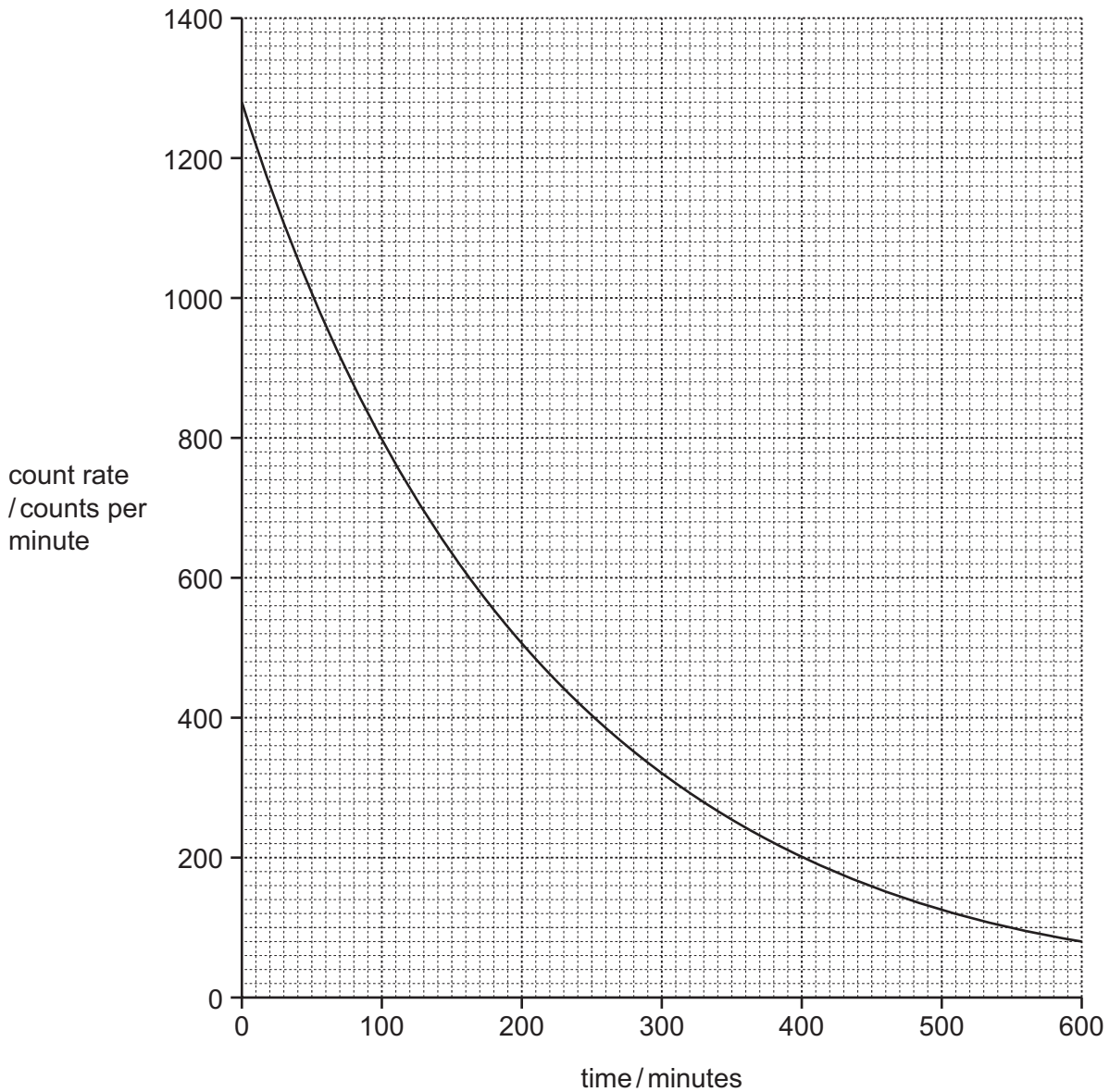


Fig. 10.1

- (i) Calculate the half-life of this isotope.

Show your working.

..... [2]

- (ii) What percentage of the original radioactive nuclei will still be present after 250 minutes?

Show your working.

..... % [2]

- (c) A teacher demonstrated how the count rate detected by a Geiger-Müller tube depends on the distance between the front of the tube and a radioactive α (alpha) source.

Fig. 10.2 shows how the equipment was set up.

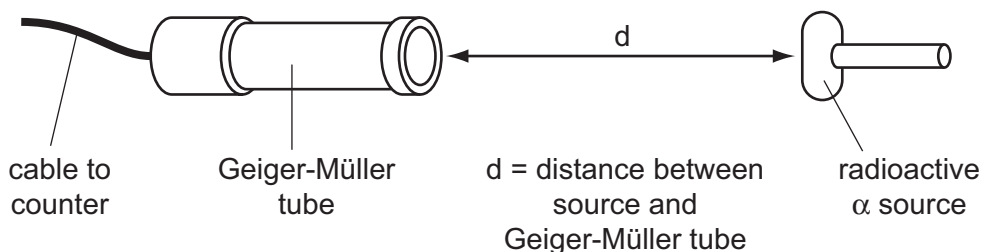


Fig. 10.2

Fig. 10.3 shows a graph of the results of the experiment.

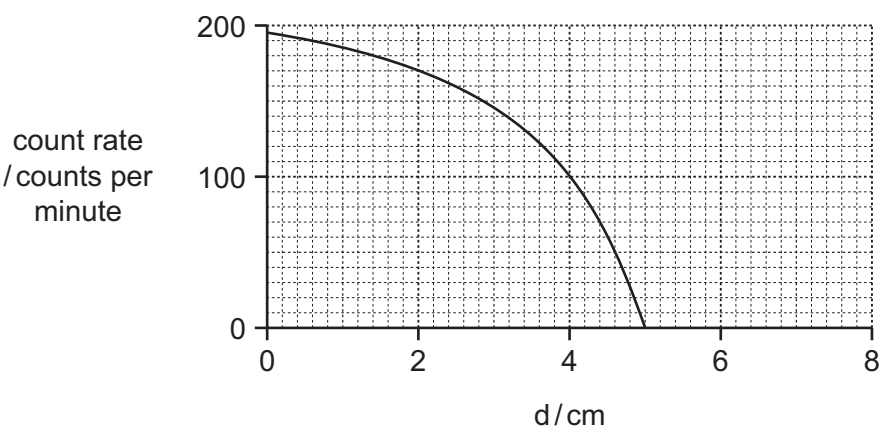


Fig. 10.3

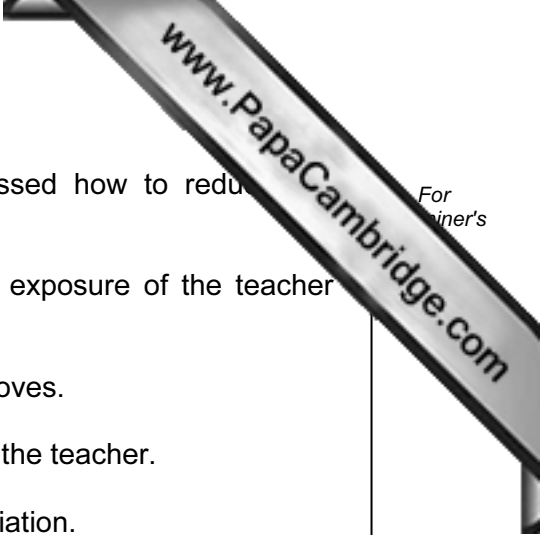
- (i) State the range of the alpha particles. [1]
- (ii) Describe how you would use the apparatus to obtain these results.

.....

.....

.....

..... [3]



(iii) Before carrying out the experiment the teacher discussed how to reduce exposure to radiation.

Which idea below would **not** help reduce the radiation exposure of the teacher during the experiment? Explain your answer.

idea 1 Hold the source with long tongs and wear gloves.

idea 2 Place a lead shield between the source and the teacher.

idea 3 Wear a photographic badge that detects radiation.

idea because

.....

.....

..... [2]

11 Fig. 11.1 shows a food chain. The arrows show how energy flows from one organism to another along the chain.




Fig. 11.1

(a) The grass is the producer in this food chain.

Explain how plants produce a supply of chemical energy at the start of the food chain.

.....

.....

.....

.....

.....

.....

.....

[4]

(b) Energy is lost between the trophic levels in a food chain.

Describe **one** way in which energy is lost from this food chain.

.....

.....

.....

[2]

(c) Outline how the cells in the man's body obtain useful energy from the food that has been digested and absorbed into them.

.....

.....

.....

.....

[2]

- 12 (a) A student added a solution of the same dilute acid to each of the test-tubes shown in Fig. 12.1.

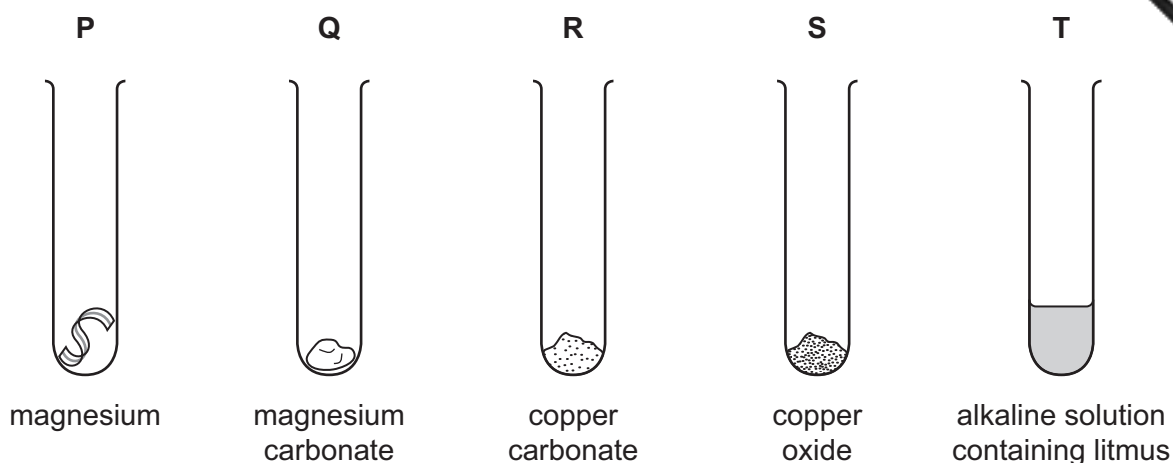


Fig. 12.1

Complete Table 12.1 by matching the test-tubes, **P**, **Q**, **R**, **S** and **T**, with the observations which are made when the dilute acid reacts with the contents.

Some of the observations apply to more than one of the test-tubes. You may use each letter once, more than once or not at all.

Table 12.1

observations	test-tube(s)
The mixture turns red when excess acid has been added.	
A colourless gas is given off.	
A blue solution is formed.	
A colourless gas which pops when ignited is given off.	

[4]

- (b) The student used the apparatus shown in Fig. 12.2 to investigate neutralisation reactions involving two acids, **A** and **B**.

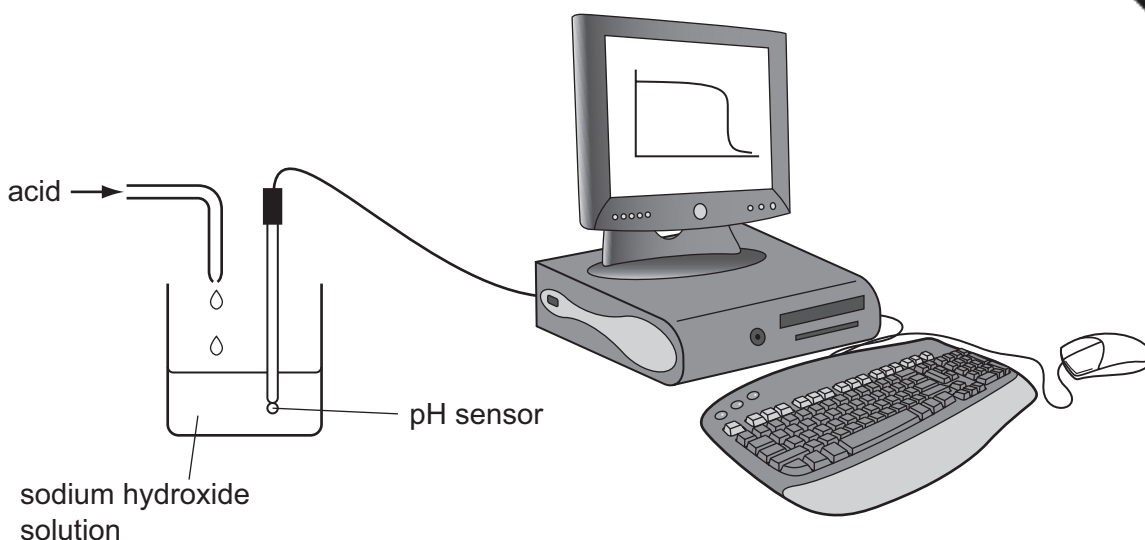


Fig. 12.2

In each experiment, 25.0 cm^3 of the same solution of sodium hydroxide were placed into a beaker. The acid was added at a constant rate until it was in excess.

The measurements were displayed on the computer screen as a graph of pH of the reaction mixture against volume of acid that had been added.

The results for the two acids are shown in Fig. 12.3.

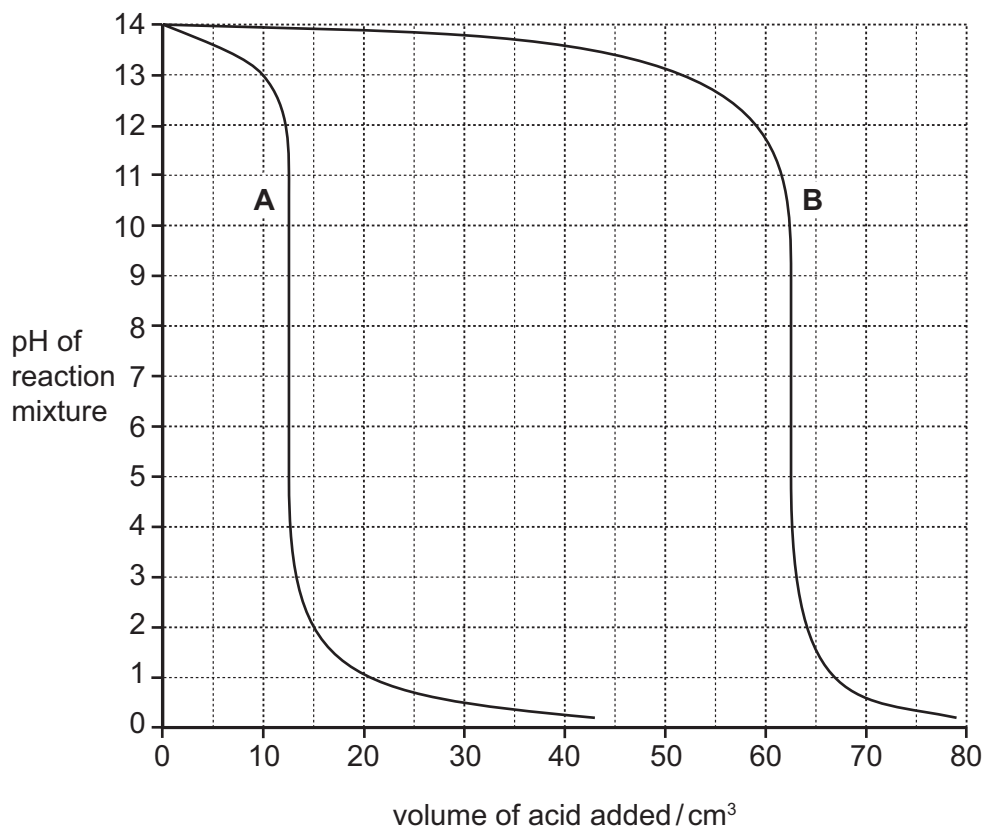
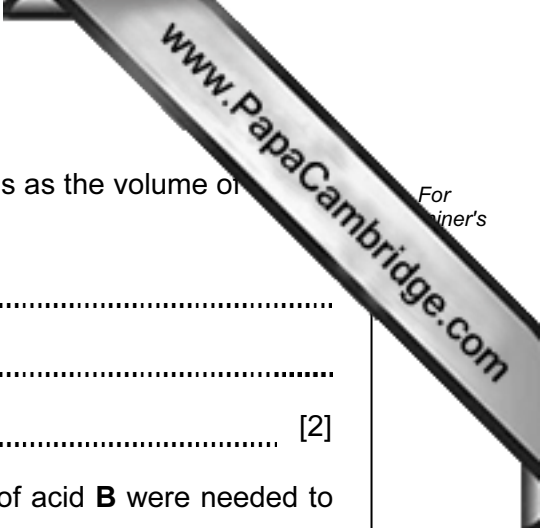


Fig.12.3



- (i) Describe how the pH of the mixture in the beaker changes as the volume of acid added increases.

.....
.....
..... [2]

- (ii) The student found that 12.5 cm³ of acid **A** and 62.5 cm³ of acid **B** were needed to neutralise the sodium hydroxide in the beaker.

Explain how the student obtains these results from the graph shown in Fig. 12.3.

.....
..... [1]

- (iii) Acids **A** and **B** are different concentrations of hydrochloric acid, HCl. Acid **B** had a concentration of 1.0 mol/dm³.

Use the results the student obtained to calculate the concentration of acid **A**.

Explain your answer briefly.

.....
..... [2]

